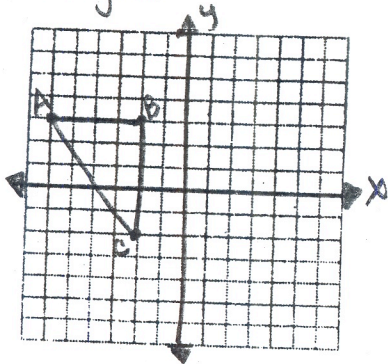
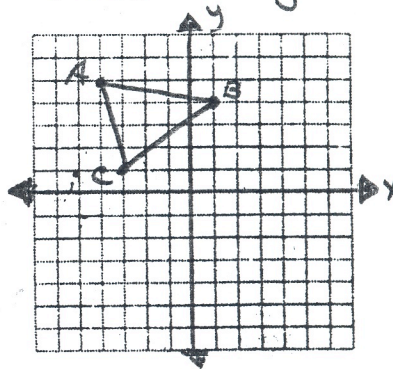


Rotate means to _____.

8.) Rotate $\triangle ABC$ 90° clockwise about the origin.

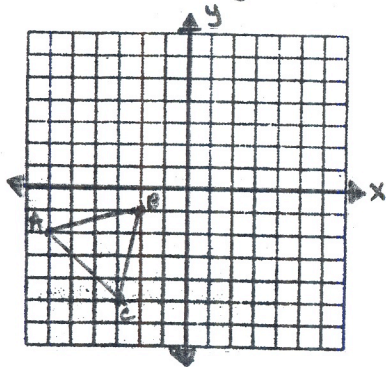


9.) Rotate $\triangle ABC$ 90° clockwise about the origin.



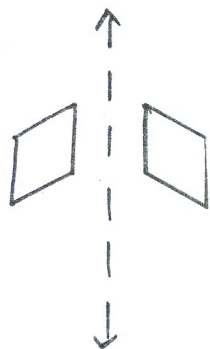
Translate means to _____.

10.) Translate $\triangle ABC$ 4 units right and 3 units up.




Identify the following transformations as a reflection, rotation, or translation.

11.)



12.)



13.)

