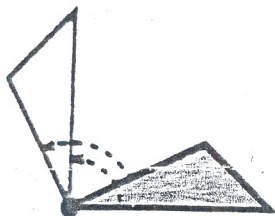


IT'S YOUR TURN

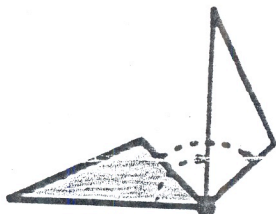


Rotation can be either clockwise or counterclockwise—and around any point in the plane. The examples below show grey triangles rotated in a plane to the position of the white triangle.



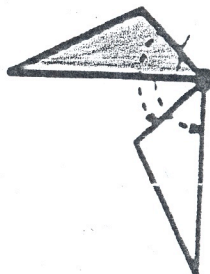
Example 1

Rotate 90°
counterclockwise (CCW)



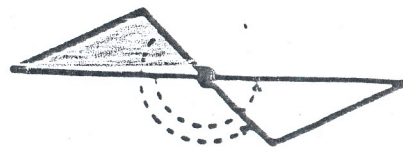
Example 2

Rotate 90°
clockwise (CW)



Example 3

Rotate 90°
counterclockwise (CCW)



Example 4

Rotate 180°
counterclockwise (CCW)

Draw the figure on the grid rotated, around the dot, as indicated:

<p>1. 90° CW</p>	<p>2. 90° CW</p>	<p>3. 180°</p>
<p>4. 90° CCW</p>	<p>5. 180°</p>	<p>6. 90° CW</p>