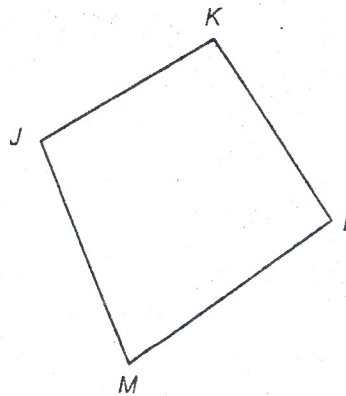


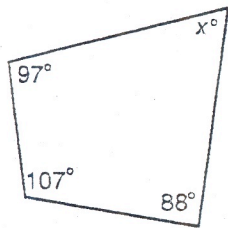
Quadrilaterals

- Name a side that is consecutive with \overline{JK} .
- Name the side opposite \overline{KL} .
- Name the vertex that is opposite L .
- Name a pair of consecutive vertices.
- Name the angle opposite $\angle K$.

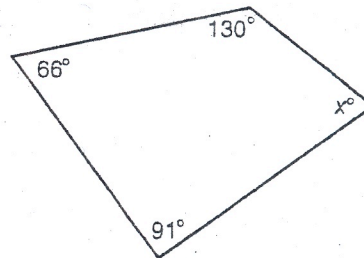


Find the missing measure(s) in each figure.

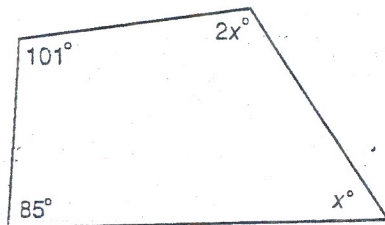
6.



7.



8.



9.

