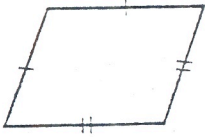


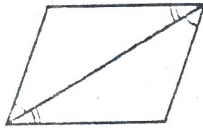
**Example 2**

Based on the markings, decide if each figure is a parallelogram.  
Justify your answer.

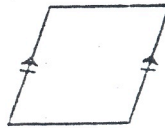
2.



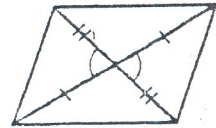
3.



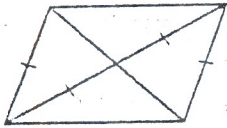
4.



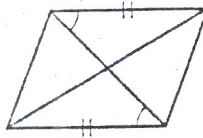
5.



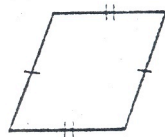
6.



7.



8.



9.

