

Practice

Chen

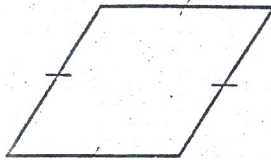
Rectangles, Rhombi, and Squares

Identify each parallelogram as a rectangle, rhombus, square, or none of these.

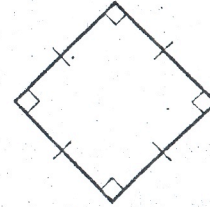
1.



2.



3.



Find each measure.

4. TQ

5. TR

6. RP

7. QS

8. SR

9. $m\angle BCE$

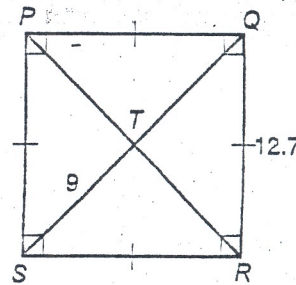
10. $m\angle BEC$

11. AC

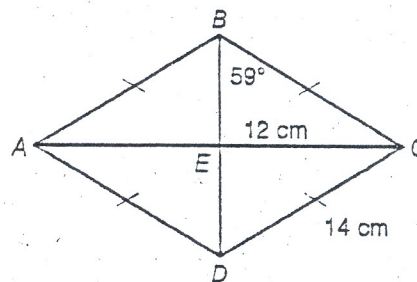
12. $m\angle ABD$

13. AD

14. $m\angle ADC$



Exercises 4-8



Exercises 9-14